

October Test 1

Total mark
15
(5 marks)

1. Choose the correct answer.

- a. Which number of the following has 3 hundredths , 7 ones , 2 thousandths ?
 A. 0.732 B. 3.72 C. 7.032 D. 3.702
- b. The L.C.M of 5 and 6 is _____
 A. 20 B. 24 C. 30 D. 40
- c. $174.602 = 174 +$ _____
 A. 6.02 B. 0.602 C. 602 D. 60.2
- d. 7 Tenths – 7 Thousandths = _____
 A. 0.693 B. 0.63 C. 6.3 D. zero
- e. All the following are equal except _____
 A. 0.300 B. 0.3 C. 0.003 D. 0.30

2. Complete.

(5 marks)

- a. If $x + 52.89 = 62.90$, then $x =$ _____
- b. The smallest odd prime number is _____
- c. $2.416 \times 10 =$ _____
- d. The value of the digit 5 in the number 31.25 is _____
- e. $21.729 \approx$ _____ [to the nearest Tenth]

3. a. Find the result of each of the following.

(2 marks)

1. $17.3 + 4.6$ 2. $12.74 - 0.359$

- b. Mazen had 35 L.E. He bought a ball for 9.75 L.E. and a book for 8.4 L.E.
 How much money was left with Mazen ?

(3 marks)

October Test

2



(5 marks)

1. Choose the correct answer.

a. $72.43 \div 10 =$ _____

- A. 7.243 B. 72.34 C. 7,243 D. 724.3

b. The common factor of all numbers is _____

- A. 0 B. 1 C. 2 D. 3

c. Which of the following is an expression ?

- A. $2.36 + X = 14.78$ B. Sara saved 20 L.E per day
 C. $13.15 + 2.8 - X$ D. $1.75 + 1.25 = 2.1 + 0.9$

d. $39.999 \approx$ _____ [to the nearest Hundredth]

- A. 39 B. 40 C. 39.9 D. 39.99

e. $1.7 + 0.2$ $1.33 + 0.51$

- A. < B. = C. >

2. Complete.

(5 marks)

a. $70.106 = 70 + 0.1 +$ _____

b. 5 Hundredths – 24 Thousandths = _____ Thousandths.

c. $458.2 \div 100 =$ _____

d. In 734.28 , the digit 2 is in the _____ place. Its value is _____

e. The number whose all prime factors are 2, 3 and 5 is _____

3. a. The weight of Noha is 35.275 kg and the weight of Hala is 42.012 kg

(2 marks)

What is their weight together ?

b. Find the G.C.F and L.C.M for 12 and 10

(3 marks)

October Test **3**

Total mark
15
(5 marks)

1. Choose the correct answer.

a. The L.C.M of 3 and 7 is _____

- A. 1 B. 21 C. 37 D. 73

b. The smallest prime number is _____

- A. 0 B. 1 C. 3 D. 2

c. $724.3 \div 100 =$ _____

- A. 7.243 B. 72.34 C. 7,243 D. 724.3

d. Which of the following is not an expression ?

- A. $x + 0.8 - 1.6$ B. $3.25 + x + 5.55$ C. $3.6 - x = 1.54$ D. $2.36 + 1.5 - x$

e. $5.65 \square 56.5$

- A. $>$ B. $=$ C. $<$

2. Complete.

(5 marks)

a. $3.9 + 1.26 =$ _____

b. $17.5 - 8.36 =$ _____

c. $21.316 \approx$ _____ [to the nearest Hundredths]

d. The place value of the digit 3 in the number 15.263 is _____

e. The first four multiples of 5 are _____ , _____ , _____ and _____

3. a. Write the greatest decimal less than one which consists of 6 , 4 , 3 and 5 , then round it to the nearest Tenths and Thousandths. (3 marks)

b. Solve the following equations.

(2 marks)

1. $8.2 + p = 10.4$

2. $k - 6.82 = 3.11$

Test

1

Total mark

15

1 Choose the correct answer :

(5 marks)

1 Which number of the following has 3 hundredths , 7 ones , 2 thousandths ?

- (a) 0.732 (b) 3.72 (c) 7.032 (d) 3.702

2 The LCM of 5 and 6 is

- (a) 20 (b) 24 (c) 30 (d) 40

3 $174.602 = 174 +$

- (a) 6.02 (b) 0.602 (c) 602 (d) 60.2

4 7 tenths – 7 thousandths =

- (a) 0.693 (b) 0.63 (c) 6.3 (d) zero

5 All the following are equal except

- (a) 0.300 (b) 0.3 (c) 0.003 (d) 0.30

2 Complete :

(5 marks)

1 If $X + 52.89 = 62.90$, then $X =$

2 All the factors of 15 are

3 $2.416 \times 10 =$

4 The value of the digit 5 in the number 31.25 is

5 $21.729 \approx$ (to the nearest Tenth)

3 [a] Find the result of each of the following.

(2 marks)

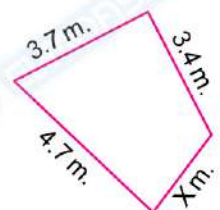
1 $17.3 + 4.6$

2 $12.74 - 0.359$

.....

[b] If the perimeter of this shape is 16.9 meters ,
 what does X equal ?

(3 marks)



.....

Test

2

Total mark

15

1 Choose the correct answer :

(5 marks)

- 1 $72.43 \div 10 = \dots\dots\dots$
 (a) 7.243 (b) 72.34 (c) 7243 (d) 724.3
- 2 The common factor of all numbers is $\dots\dots\dots$
 (a) 0 (b) 1 (c) 2 (d) 3
- 3 Which of the following is an expression ?
 (a) $2.36 + X = 14.78$ (b) Sara saved 20 L.E per day
 (c) $13.15 + 2.8 - X$ (d) $1.75 + 1.25 = 2.1 + 0.9$
- 4 $39.999 \approx \dots\dots\dots$ [to the nearest Hundredth]
 (a) 39 (b) 40 (c) 39.9 (d) 39.99
- 5 $1.7 + 0.2 \square 1.33 + 0.51$
 (a) < (b) = (c) >

2 Complete :

(5 marks)

- 1 $70.106 = 70 + 0.1 + \dots\dots\dots$
- 2 5 Hundredths – 24 Thousandths = $\dots\dots\dots$ Thousandths.
- 3 $458.2 \div 100 = \dots\dots\dots$
- 4 In 734.28 , the digit 2 is in the $\dots\dots\dots$ place. Its value is $\dots\dots\dots$
- 5 The number whose all prime factors are 2 , 3 and 5 is $\dots\dots\dots$

3 [a] The weight of Noha is 35.275 kg. and the weight of Hala is 42.012 kg.

What is their weight together ?

(2 marks)

$\dots\dots\dots$

[b] Find the GCF and LCM for 12 and 10

(3 marks)

Test

3

Total mark

15

1 Choose the correct answer :

(5 marks)

1 For the equation : $7.325 - X = 4.127$, which of the following part – to – whole bar model is suitable ?

(a)

X	
7.325	4.127

(b)

7.325	
X	4.127

(c)

4.127	
7.325	X

(d)

X	
4.127	3.198

2 The smallest prime number is

(a) 0

(b) 1

(c) 3

(d) 2

3 $724.3 \div 100 = \dots\dots\dots$

(a) 7.243

(b) 72.34

(c) 7243

(d) 724.3

4 Which of the following is not an expression ?

(a) $x + 0.8 - 1.6$

(b) $3.25 + x + 5.55$

(c) $3.6 - x = 1.54$

(d) $2.36 + 1.5 - x$

5 5.65 56.5

(a) >

(b) =

(c) <

2 Complete :

(5 marks)

1 $3.9 + 1.26 = \dots\dots\dots$

2 $17.5 - 8.36 = \dots\dots\dots$

3 $21.316 \approx \dots\dots\dots$ (to the nearest Hundredth)

4 The place value of the digit 3 in the number 15.263 is

5 The first four multiples of 5 are,,,

- 3 [a]** Omar exercises every 12 days. Rana exercises every 8 days. Both friends exercised together today. How many days will it be until they exercise together again? Do you have to find the GCF or the LCM? What is the answer? (3 marks)

.....

.....

.....

- [b] Solve the following equations :** (2 marks)

1 $8.2 + p = 10.4$

2 $k - 6.82 = 3.11$

.....

.....

.....

Answers of Mathematics

Answers of Test 1

1 1 c 2 c 3 b 4 a 5 c

2 1 10.01 2 1, 3, 5 and 15 3 24.16 4 0.05 or $\frac{5}{100}$ 5 21.7

3 [a] 1

$$\begin{array}{r} 17.3 \\ + 4.6 \\ \hline 21.9 \end{array}$$

2

$$\begin{array}{r} 6\ 13\ 10 \\ 12.\cancel{7}\ \cancel{4}\ \cancel{0} \\ - 0.3\ 5\ 9 \\ \hline 12.3\ 8\ 1 \end{array}$$

[b] $3.4 + 3.7 + 4.7 + X = 16.9$

$$11.8 + X = 16.9$$

$$X = 16.9 - 11.8 = 5.1\text{ m}$$

Answers of Test 2

1 1 a 2 b 3 c 4 b 5 c

2 1 0.006 2 26 3 4.582

4 tenths, 0.2 or $\frac{2}{10}$ 5 30

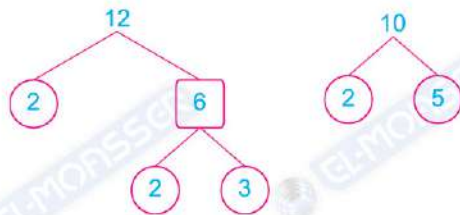
3 [a] Their weight = $35.275 + 42.012 = 77.287\text{ kg}$

[b] $12 = 2 \times 2 \times 3$

$$10 = 2 \times 5$$

$$\text{GCF} = 2$$

$$\text{LCM} = 2 \times 2 \times 3 \times 5 = 60$$



Answers of Test 3

1 1 b 2 d 3 a 4 c 5 c

2 1 5.16 2 9.14 3 21.32

4 thousandths 5 0, 5, 10, 15

3 [a] I have to find the LCM :

$$8 = 2 \times 2 \times 2$$

$$12 = 2 \times 2 \times 3$$

LCM = $2 \times 2 \times 2 \times 3 = 24$, so it will be 24 days.

[b] 1 $8.2 + p = 10.4$

$$p = 10.4 - 8.2$$

$$= 2.2$$

2 $k - 6.82 = 3.11$

$$k = 6.82 + 3.11$$

$$= 9.93$$

Assessment 1

First: Complete the following:

- The place value of the digit 5 in 6,230.257 is
- The number 15.892 rounded to the nearest **Hundredth** is
- The prime factors of **18** are
- is a common multiple of all numbers.

Second: Choose the correct answer:

- The value of increases when multiplying by 10 to 4.25
 a 425 b 42.5 c 4.25 d 0.425
- $4.06 =$
 a $4 + 6$ b $40 + 0.6$ c $4 + 0.06$ d $10 + 0.06$
- The smallest prime number is
 a 0 b 1 c 2 d 3
- The GCF for 8 and 12 is
 a 8 b 12 c 24 d 4

Third: Compare using (<, = or >):

- 45.6×10 $4.56 \div 10$ $7.25 - 3.8$ $3.8 + 0.35$
- $78,258.023$ $78,258.203$ $20 + 7 + 0.08$ $27 + 0.8$

Fourth: Answer the following:

- Fares traveled from Cairo to Alexandria via the agricultural road and stopped for a rest in the cities of Tanta and Damanhur. The distance between Cairo and Alexandria is **225** km. The distance between Cairo and Tanta is **100.3**, and the distance between Tanta and Damanhur is **64.7** km. Calculate the distance between Alexandria and Damanhur.

- Find The **GCF** and **LCM** for **24** and **16**. Use prime factorization.

16 =

24 =

GCF = =

LCM = =

Assessment 2

First: Complete the following:

- 1 All prime numbers are odd numbers, except which is an number.
- 2 The prime numbers between 20 and 30 are and
- 3 $300 + 50 + 0.2 + 0.008 =$
- 4 Five milliard, thirty thousand and ninety-nine thousandths (**In standard form**):
.....

Second: Choose the correct answer:

- 1 The equation that represents [3.5 plus "m" equals 8.7] is
 a $m - 3.5 = 8.7$ b $m - 8.7 = 3.5$ c $3.5 + m = 8.7$ d $3.5 - m = 8.7$
- 2 The value of 78.25 is decreased when dividing by 10 to
 a 7,825 b 782.5 c 7.825 d 0.7825
- 3 $502 + 0.2 + 0.005$ $50 + 2 + 0.25$
 a $>$ b $=$ c $<$ d \leq

Third: Put (✓) for the correct statement and (x) for the wrong statement:

- 1 8 is a common multiple of 16 and 24. ()
- 2 " $4.5 + 2.3 + y = 15$ " is called an equation. ()
- 3 $300 + 50 + 0.2 + 0.003 = 350.203$ ()

Fourth Answer the following:

A class has 16 girls and 12 boys. The teacher wants to divide them into equal groups with the same number of boys and girls. What is the largest number of groups that can be formed? How many boys are in each group? And how many girls are in each group?

.....

Model 1

First Choose the correct answer:

- 1 In 432.519, which digit is in the Hundredths place?
a 4 b 3 c 5 d 1
- 2 Three and seventy-five hundredths =
a 3.57 b 3.75 c 375 d 35.7
- 3 The value of digit 4 in 3.514 is
a 4 b 40 c 0.04 d 0.004
- 4 The place value of digit 3 in 35.21 is
a Hundredth b Tens c Ones d Tenths
- 5 The composite number in the following numbers is
a 7 b 17 c 15 d 5
- 6 The value of the variable "x" in the equation " $9.5 - x = 4.3$ " is
a 13.8 b 2.5 c 5.8 d 5.2
- 7 The only even prime number is
a 1 b 0 c 2 d 3

Second Complete the following:

- 1 The place value of the digit 9 in 596,258.27 is
- 2 The number has only 2 factors.
- 3 The value of variable "y" in the equation " $5.9 + y = 13.5$ " is
- 4 If $8.23 + p = 10.24$, then $p =$

Third Answer the following:

- 1 Mona had **95.5** LE, and she spent **35.75** LE. Find the remainder with her.

.....
.....

- 2 Write three decimals, if we round each of them to the nearest **Hundredth**, it becomes **17.36**.

.....
.....

- 3 The weight of Farida is **45.235** kg, and the weight of Mazen is **52.012** kg. Find their weight together.

.....
.....

- 4 If the **LCM** of two numbers is **36** and their **GCF** is **3**, what could be these two numbers?

.....
.....

Model **2****First** Choose the correct answer:

- 1 $0.500 =$
 - a 50 tenths
 - b five hundred
 - c five tenths
 - d five thousandths
- 2 The value of the number is decreased when divided by 10 to 75.28.
 - a 752.8
 - b 7.528
 - c 750.28
 - d 75.028
- 3 The value of the digit 3 in 2.038 is
 - a 30
 - b 3
 - c 0.3
 - d 0.03
- 4 The digit which represents Hundredths in 52.319 is
 - a 5
 - b 1
 - c 3
 - d 9
- 5 The prime number has only factor(s).
 - a 3
 - b 1
 - c 2
 - d otherwise
- 6 10 is a multiple of
 - a 3
 - b 4
 - c 5
 - d 6
- 7 All the following are composite numbers, except
 - a 66
 - b 67
 - c 68
 - d 69

Second Complete the following:

- 1 The value of the number 270 is decreased when divided by 10 to
- 2 Three and twenty five thousandths (*in standard form*) =
- 3 The **GCF** of any two different prime numbers is
- 4 If $2.53 + 4.38 + x = 12.76$, then $x =$

Third Answer the following:

- 1 Arrange the following numbers in a **descending** order:

32.141 , 32.414 , 32.14 , 31.999 , 31.99

.....,,,,

- 2 Decompose the number **60.047** using the expanded form:

.....
.....

- 3 Murad has **73.25** LE. He spent **10** LE. Find the remainder with him

.....
.....

- 4 Find the **GCF** of **24** and **40** by factorization method.

.....
.....
.....
.....

Model **3**

First Choose the correct answer:

- 1 $0.2 + \dots = 7.2$
 a 7 b 0.7 c 70 d 0.07
 - 2 $5.97 \times 100 = \dots$
 a 5970 b 597 c 0.0597 d 59.7
 - 3 Seventy-one and seventy hundredths = \dots (in standard form)
 a 71.70 b 70.070 c 17.70 d 70.07
 - 4 $34.971 \approx \dots$ (to the nearest 0.1)
 a 34.8 b 30 c 34.9 d 35
 - 5 Which of the following is a mathematical expression?
 a $m + 6 = 9$ b $3 + 6 = 9$ c $1.2 + a = 4.5$ d $m + 44$
 - 6 Using the opposite bar model, the value of m is \dots
 a 2.8 b 1.64 c 1.8 d 0.36
- | | |
|------|-----|
| 3.16 | |
| m | 2.8 |
- 7 The factors of 18 are/is \dots
 a 2, 3, 3 b 18, 9, 2 c 1, 2, 3, 6, 9, 18 d 6

Second Complete the following:

- 1 $458.025 \approx \dots$ (to the nearest Hundredth)
 - 2 97 thousandths + 49 thousandths = \dots
 - 3 The smallest odd prime number is \dots
 - 4 The equation of the opposite bar model is \dots
- | | |
|------|-----|
| 13.6 | |
| 6.8 | x |

Third Answer the following:

- 1 If the sum of two decimal numbers is **40.1**, and the smaller number of them is **4.992**, what is the greater decimal number?

.....

- 2 Arrange the following numbers in an **ascending** order:

1.351 , 1.135 , 1.531 , 1.315 , 3.135

..... , , , ,

- 3 Find the value of **x** in the equation " **$x - 6.82 = 1.23$** "

.....

.....

- 4 Find the **GCF** of **36** and **24**:

36:

24:

GCF =

Model 4

First Choose the correct answer:

- 1 Which of the following number is the largest number
(425.002 , 425.02 , 425 , 425.2)
- 2 $100 + 20 + 0.05 + 0.009 = \dots\dots\dots$
(120.59 , 120.059 , 120.0059 , 1200.59)
- 3 $\dots\dots\dots$ is the common factor of all numbers (1 , 0 , 2 , 3)
- 4 2 hundredth – 2 thousandths = $\dots\dots\dots$ (0.18 , 18 , 0.018 , 0)
- 5 If $8.24 - y = 3.12$, then $y = \dots\dots\dots$ (5.12 , 13.36 , 51.2 , 5.012)
- 6 $\frac{463}{100} = \dots\dots\dots$ (4.63 , 46.3 , 463 , 4.063)
- 7 The only even prime number is $\dots\dots\dots$ (1 , 3 , 2 , 0)

Second Complete the following:

- 1 In 85.780, the digit 7 is in the $\dots\dots\dots$ place and
its value is $\dots\dots\dots$
- 2 $0.523 = \dots\dots\dots$ thousandths + $\dots\dots\dots$ hundredths
+ $\dots\dots\dots$ tenths
- 3 $\dots\dots\dots \div 10 = 2.7$
- 4 If $e = 7.201$, then $e - 5.201 = \dots\dots\dots$

Third Answer the following:

- 1 Sara had **56.5** LE, he bought a book for **12.2** LE and candies for **15.5** LE. How much money is left with Sara?

.....
.....
.....

- 2 Find the **GCF** and **LCM** for **20** and **30**.

.....
.....
.....
.....

- 3 **68.367 - 2.455 =**

- 4 Solve the equation "**2.456 + x = 7.382**"

.....
.....

Model 5

First Choose the correct answer:

- 1 Which of the following numbers is the smallest number ?
(425.002 , 425.02 , 425 , 425.2)
- 2 The number..... is the common multiple of all numbers.
(1 , 0 , 2 , 3)
- 3 45 hundredths + 8 thousandths = thousandths
(0.458 , 458 , 0.53 , 53)
- 4 $78.5 \times 10 =$
(785 , 7.85 , 7850 , 78)
- 5 The smallest odd prime number is
(1 , 3 , 5 , 0)
- 6 $36.479 = 36.5$ to the nearest
(Tenth , Thousandth , Hundredth , 0.001)
- 7 5.023 $5 + 0.2 + 0.03$ (< , > , =)

Second Complete the following:

- 1 $85.7865 =$ (to the nearest *Thousandth*)
- 2 9 Ones + 6 Thousandths =
- 3 56 Thousandths = +
- 4 $9 - 4.653 =$

Third Answer the following:

- 1 Solve the equation " $8.23 + x = 10.24$ "

.....
.....

- 2 Ahmed had 30 LE, he bought a notebook for 8.4 LE and a pen for 12.75 LE. How much money is left with Ahmed?

.....
.....

- 3 Find the GCF and LCM for 30 and 60.

.....
.....
.....
.....

- 4 $326.578 - 122.244 =$

Model **6**

First Choose the correct answer :

- 1 The value of the digit 7 in 124.327 is
 - a Thousandth
 - b Thousands
 - c 7,000
 - d 0.007
- 2 The place value of digit 4 in 12.043 is
 - a Hundreds
 - b Hundredth
 - c 0.04
 - d 0.4
- 3 $302.005 = 300 + 2 + \dots\dots\dots$
 - a 5
 - b 0.050
 - c 0.500
 - d 0.005
- 4 $0.35 + 0.58 = \dots\dots\dots$
 - a 0.39
 - b 1.39
 - c 0.93
 - d 0.95
- 5 If $m + 3.5 = 8.92$, then $m = \dots\dots\dots$
 - a 12
 - b 12.42
 - c 5.42
 - d 5
- 6 The LCM of two different numbers is..... their GCF.
 - a more than
 - b less than
 - c equal to
 - d all of them
- 7 3,2, and 7, are prime factors of
 - a 21
 - b 14
 - c 42
 - d 44

Second complete the following

- 1 The benchmark of 0.9 is
- 2 The word form of 7.008 is
- 3 7 Tenths + 7 Thousandths =
- 4 The smallest prime number is.....

Third Answer the following

- 1 Malek had **53.75** LE, he spent **35.05** LE. Find the left money with him now.

.....
.....

- 2 The height of Nada is **1.06** m, Ahmed is taller than her by **0.35** m. find the height of Ahmed.

.....
.....

- 3 When $m = 53.218$ and $e = 64.61$, estimate the sum of them and write the actual sum.

Estimation is

Actual sum =

- 4 If Mona saved **144** LE every month, how much money does she save after **100** months?

.....
.....

Model 7

First Choose the correct answer

- 1 The number 10 thousand ,175 and 314 thousandths in standard form is
- a 10,157.413 b 10,571.314
c 10,175.314 d 10,751.314
- 2 $999.9 \approx$ (to the nearest *whole number*)
- a 990 b 999 c 1000 d 900
- 3 $200 + 80 + 8 + 0.4 =$
- a 288.5 b 288.4 c 289 d 200.884
- 4 The value of 9 in Hundredths is
- a 9.900 b 0.9 c 0.09 d 0.009
- 5 All the following are prime numbers, except.....
- a 2 b 3 c 1 d 5
- 6 16 is a multiple of
- a 6 b 4 c 36 d 32
- 7 $5.6 + m$ is a/an
- a equation b expression c subtraction d either

Second Complete the following:

- 1 Three hundred two and twelve thousandths (*in standard form*) is
- 2 7 Tenths= $\dots\dots\dots$ Hundredths= $\dots\dots\dots$ Thousandths
- 3 $85.134 - 59.076 = \dots\dots\dots$
- 4 $23.52 \times 10 = \dots\dots\dots$

Third Answer the following:

- 1 Ali has **53.75** LE, his father gave him **35.05** LE. Find how much money with Ali now.

.....
.....

- 2 If Safaa saved **23.5** LE per day, how much does she has after **10** days?

.....
.....

- 3 Hoda has **3.95** LE and Hala has **6.3** LE. How much money do they have together?

.....
.....

- 4 Find the **LCM** and **GCF** of **12** and **16**.

.....
.....
.....
.....

Guide Answers

Model 1

First:

- 1 1
- 2 3.75
- 3 0.004
- 4 Tens
- 5 15
- 6 5.2
- 7 2

Second:

- 1 Ten Thousands
- 2 prime
- 3 7.6
- 4 2.01

Third:

- 1 The remainder = $95.5 - 35.75 = 59.75$ LE
- 2 Any three decimals from 17.355 to 17.364
- 3 Their weight together = $45.235 + 52.012 = 97.247$ kg
- 4 3 and 36 or 12 and 9

Model 2

First:

- 1 five tenths
- 2 752.8
- 3 0.03
- 4 1
- 5 2
- 6 5
- 7 67

Second:

- 1 27
- 2 3.025
- 3 1
- 4 5.85

Third:

- 1 32.414, 32.141, 32.14, 31.999, 31.99
- 2 $60.047 = 60 + 0.04 + 0.007$
- 3 The remainder = $73.25 - 10 = 63.25$ LE
- 4 $24 = 2 \times 2 \times 2 \times 3$
 $40 = 2 \times 2 \times 2 \times 5$
 GCF = $2 \times 2 \times 2 = 8$

Model 3

First:

- 1 7
- 2 597
- 3 71.70
- 4 35
- 5 $m + 44$
- 6 0.36
- 7 1, 2, 3, 6, 9, 18

Second:

- 1 458.03
- 2 146 thousandths (0.146)
- 3 3
- 4 $x + 6.8 = 13.6$

Third:

- 1 The greater decimal = $40.1 - 4.992 = 35.108$
- 2 1.135, 1.315, 1.351, 1.531, 3.135
- 3 $x = 6.82 + 1.23 = 8.05$
- 4 $36 = 2 \times 2 \times 3 \times 3$
 $24 = 2 \times 2 \times 3 \times 2$
 GCF = $2 \times 2 \times 3 = 12$

x	
6.82	1.23

Model 4

First:

- 1 425.2
- 2 120.059
- 3 1
- 4 0.018
- 5 5.12
- 6 4.63
- 7 2

Second:

- 1 Tenths, 0.7
- 2 3, 2, 5
- 3 27
- 4 2

Third:

- 1 Sara paid = $12.2 + 15.5 = 27.7$ LE
 The left money with Sara = $56.5 - 27.7 = 28.8$ LE
- 2 $20 = 2 \times 2 \times 5$
 $30 = 2 \times 3 \times 5$
 GCF = $2 \times 5 = 10$
 LCM = $2 \times 2 \times 3 \times 5 = 60$
- 3 65.912
- 4 $x = 7.382 - 2.456 = 4.926$

Model 5

First:

- | | |
|-------|----------|
| 1 425 | 2 0 |
| 3 458 | 4 785 |
| 5 3 | 6 tenths |
| 7 < | |

Second:

- | | |
|------------------|---------|
| 1 85.787 | 2 9.006 |
| 3 $0.05 + 0.006$ | 4 4.347 |

Third:

- $X = 10.24 - 8.23 = 2.01$
- Ahmed paid = $8.4 + 12.75 = 21.15$ LE
The left money = $30 - 21.15 = 8.85$ LE
- $30 = 2 \times 5 \times 3$
 $60 = 2 \times 5 \times 3 \times 2$
GCF = $2 \times 5 \times 3 = 30$
LCM = $2 \times 2 \times 5 \times 3 = 60$
- 204.334

Model 6

First:

- | | |
|---------|-------------|
| 1 0.007 | 2 Hundredth |
| 3 0.005 | 4 0.93 |
| 5 5.42 | 6 less than |
| 7 42 | |

Second:

- 1
- Seven and eight thousandths
- 0.707
- 2

Third:

- The remainder = $53.75 - 35.05 = 18.70$ LE
- The height of Ahmed = $1.06 + 0.35 = 1.41$ m
- Estimation: $53 + 65 = 128$
Actual sum = $53.218 + 64.61 = 117.828$
- Mona saves = $144 \times 100 = 14,400$ LE

Model 7

First:

- | | |
|--------------|---------|
| 1 10,175.314 | 2 1,000 |
| 3 288.4 | 4 0.09 |
| 5 1 | 6 4 |
| 7 expression | |

Second:

- | | |
|-----------|----------|
| 1 302.012 | 2 70,700 |
| 3 26.058 | 4 235.2 |

Third:

- Money with Ali now = $53.75 + 35.05 = 88.8$ LE
- Safaa saves = $23.5 \times 10 = 235$ LE
- The total saves = $3.95 + 6.3 = 10.25$ LE
- $12 = 2 \times 2 \times 3$
 $16 = 2 \times 2 \times 2 \times 2$
GCF = $2 \times 2 = 4$
LCM = $2 \times 2 \times 3 \times 2 \times 2 = 48$

1 Complete each of the following:

5

- a In the number 675.97 the digit 6 is in the place. Its value is
- b $0.528 =$ tenths, hundredths, thousandths.
- c $427 + 0.08 + 0.006 =$ (in the standard form)
- d The prime factors of 20 are:,,
- e The variable in the equation $x + 5 = 9$ is

2 Choose the correct answer:

5

- a What would the number 3.263 become if it were increased by a factor of 10?
 3.263 0.3263 326.3 32.63
- b Five thousand, two hundred and twenty-three thousandths =
 5,200.230 5,200.23 520.023 5,200.023
- c $381.657 \approx$ (to the nearest hundredth)
 381.667 400 381.66 381.60
- d The GCF for the pair (30, 25) is
 25 5 10 3
- e is a factor of the number 35
 2 3 5 6

3 Solve each of the following problems:

3

a Estimate using rounding to the nearest hundredths:

$$8.321 - 15.369 = \dots\dots\dots$$

b Estimate the difference using benchmark numbers:

$$12.761 - 6.217 = \dots\dots\dots$$

4 Solve the following equation using bar model:

2

$$3.41 + y = 6.27$$

.....	
.....

ALLAHWANA
Gem

1 Complete each of the following:

5

- a In 43,125.86 the digit 8 is in the place. Its value is
- b Eighty-four thousand and twenty-seven hundredths = (In the standard form)
- c The value of the digit 3 in the number 8,476.23 is
- d = $6,000 + 900 + 0.3 + 60 + 0.04 + 6$
- e The number $8,476.23 \approx$ (to the nearest tenths)

2 Choose the correct answer:

5

- a 59.16 59.6
- $<$ $>$ $=$ otherwise
- b $562.8935 \approx$ (to the nearest thousandth)
- 562.894 562.8945 562.8935 6.000
- c The sum of 462 and 11.2 has decimal place(s).
- 1 2 3 0
- d If $8.675 - Z = 4.72$, then $Z =$
- 4.603 3.955 3.950 4.955
- e The LCM of 4 and 8 is
- 4 16 8 24

3 Arrange each of the following ascendingly:

2

- a 6.12, 6.6, 6.3, 6.091

.....

- b Estimate each number by rounding, to nearest tenths, then find their sum:

$$2.85 + 3.156 = \dots\dots\dots$$

4 Fill in the bar model, then find the solution:

3

$$2.456 + x = 7.382$$

.....	
.....

ALL ANSWERS
Gem

1 Complete each of the following:

5

- a The digit in the hundredths place in the number 638.52 is and its value is
- b $479.81 \approx$ (to the nearest whole number)
- c 2 hundredths + 93 thousandths = thousandths
- d Nine thousand five hundred thirty-two and four hundred nine thousandths in the standard form is
- e The GCF of 6 and 10 is

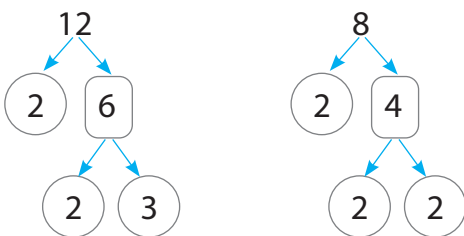
2 Choose the correct answer:

5

- a $0.174 \approx 0.17$ to the nearest
 - tenth
 - hundredth
 - hundred
 - thousandth
- b The smallest number in each of the following is
39.02, 39.2, 39.210, 40.0
 - 40.0
 - 39.210
 - 39.02
 - 39.2
- c Which choice represents the correct rounding of 7,999.52 to the nearest ones?
 - 7,000
 - 8,000
 - 7,999
 - 8,1000
- d The LCM for the numbers 12 and 20 is
 - 4
 - 6
 - 20
 - 60
- e The value of M in the equation $M - 2 = 6$ is
 - 4
 - 5
 - 8
 - 3

3 Find the GCF and the LCM of 12 and 8:

2



.....

.....

.....

.....

.....

4 Answer each of the following:**a Estimate the sum using benchmark numbers:**

$0.592 + 0.481 = \dots\dots\dots$

b Estimate the sum of the following using front-end estimation strategy:

$5.227 + 0.981 = \dots\dots\dots$

c There are 6.5 liters of milk and 1,814 milliliters of water in a pot.**How much liquid is in the pot in liters?**

.....

Answers

15
Marks

Model (1)

1 Complete each of the following:

5

- a In the number 675.97 the digit 6 is in the hundreds place. Its value is 600.
- b $0.528 = \underline{5}$ tenths, 2 hundredths, 8 thousandths.
- c $427 + 0.08 + 0.006 = \underline{427.086}$ (in the standard form)
- d The prime factors of 20 are: 2, 2, 5.
- e The variable in the equation $x + 5 = 9$ is x.

2 Choose the correct answer:

5

- a What would the number 3.263 become if it were increased by a factor of 10?
• 3.263 • 0.3263 • 326.3 • **32.63**
- b Five thousand, two hundred and twenty-three thousandths =
• 5,200.230 • 5,200.23 • 520.023 • **5,200.023**
- c $381.657 \approx$ (to the nearest hundredth)
• 381.667 • 400 • **381.66** • 381.60
- d The GCF for the pair (30, 25) is
• 25 • **5** • 10 • 3
- e is a factor of the number 35
• 2 • 3 • **5** • 6

3 Solve each of the following problems:

3

a Estimate using rounding to the nearest hundredths:

$$8.321 - 15.369 = \dots\dots\dots$$

$$\underline{8.32} + \underline{15.37} = \underline{23.69}$$


b Estimate the difference using benchmark numbers:

$$12.761 - 6.217 = \dots\dots\dots$$

$$\underline{12.75} - \underline{6.25} = \underline{6.50}$$

4 Solve the following equation using bar model:

$$3.41 + y = 6.27$$



$$y = 6.27 - 3.41$$

$$y = 2.86$$

1 Complete each of the following:

5

- a In 43,125.86 the digit 8 is in the tenth place. Its value is 0.8
- b Eighty-four thousand and twenty-seven hundredths = 84,000.27 (In the standard form)
- c The value of the digit 3 in the number 8,476.23 is 0.03
- d 6,966.34 = 6,000 + 900 + 0.3 + 60 + 0.04 + 6
- e The number 8,476.23 \approx 8,476.2 (to the nearest tenths)

2 Choose the correct answer:

5

- a 59.16 59.6
- < > = otherwise
- b 562.8935 \approx (to the nearest thousandth)
- 562.894 562.8945 562.8935 6.000
- c The sum of 462 and 11.2 has decimal place(s).
- 1 2 3 0
- d If $8.675 - Z = 4.72$, then $Z =$
- 4.603 3.955 3.950 4.955
- e The LCM of 4 and 8 is
- 4 16 8 24

3 Arrange each of the following ascendingly:

2

- a 6.12, 6.6, 6.3, 6.091

The order: 6.091, 6.12, 6.3, 6.6

- b Estimate each number by rounding, to nearest tenths, then find their sum:


$$2.85 + 3.156 = \dots\dots\dots$$

$$\underline{2.9 + 3.2 = 6.1}$$

4 Fill in the bar model, then find the solution:

3

$$2.456 + x = 7.382$$



$$\underline{x = 7.382 - 2.456}$$

$$\underline{x = 4.926}$$

5

1 Complete each of the following:

- a The digit in the hundredths place in the number 638.52 is 2 and its value is 0.02
- b $479.81 \approx$ 480 (to the nearest whole number)
- c 2 hundredths + 93 thousandths = 113 thousandths
- d Nine thousand five hundred thirty-two and four hundred nine thousandths in the standard form is 9,532.409.
- e The GCF of 6 and 10 is 2

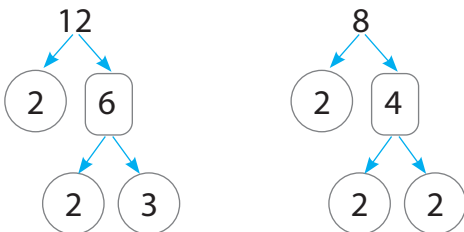
2 Choose the correct answer:

5

- a $0.174 \approx 0.17$ to the nearest
 - tenth
 - **hundredth**
 - hundred
 - thousandth
- b The smallest number in each of the following is
39.02, 39.2, 39.210, 40.0
 - 40.0
 - 39.210
 - **39.02**
 - 39.2
- c Which choice represents the correct rounding of 7,999.52 to the nearest ones?
 - 7,000
 - **8,000**
 - 7,999
 - 8,1000
- d The LCM for the numbers 12 and 20 is
 - 4
 - 6
 - 20
 - **60**
- e The value of M in the equation $M - 2 = 6$ is
 - 4
 - 5
 - **8**
 - 3

3 Find the GCF and the LCM of 12 and 8:

2



$$\begin{aligned}
 12 &= 2 \times 2 \times 3 \\
 8 &= 2 \times 2 \times 2
 \end{aligned}$$

GCF = $2 \times 2 = 4$
LCM = $2 \times 2 \times 3 \times 2$
 $= 4 \times 6 = 24$

4 Answer each of the following:**a Estimate the sum using benchmark numbers:**

$0.592 + 0.481 = \dots\dots\dots$

$0.5 + 0.5 = 1 \text{ whole}$

b Estimate the sum of the following using front-end estimation strategy:

$5.227 + 0.981 = \dots\dots\dots$

$5 + 0.9 = 5.9$

**c There are 6.5 liters of milk and 1,814 milliliters of water in a pot.
How much liquid is in the pot in liters?**

$The quantity of liquid = 6.5 L + 1.814 L = 8.314 \text{ liters}$

Test (1)

1 Choose the correct answer:

- 1 978.4852 \approx 978.4900 (to the nearest).
 a Thousandth b Tenth c Hundredth
- 2 If the value of the digit 6 is 0.006, the place value of the digit 6 is
 a 6 b tenth c hundredth d thousandth
- 3 One of the multiples of the digit 9 is
 a 3 b 19 c 27 d 39
- 4 The (G.C.F) of (36 , 45) is
 a 3 b 6 c 9 d 12

2 Complete the following:

- a 3 thousandths =
- b The number 0.56 is read as
- c $652 \frac{274}{10,000} \approx$ (to the nearest Thousandth)
- d $0.\dots = \frac{750}{\dots} = 0.75 = \frac{75}{\dots}$

3 Find the actual result, estimated result and rounding result for each of the following:

The actual value

$$\begin{array}{r} 728.53 \\ + 39.16 \\ \hline \end{array}$$

The estimation

$$\begin{array}{r} \\ + \\ \hline \end{array}$$

Rounding to the nearest Tenth

$$\begin{array}{r} \\ + \\ \hline \end{array}$$

4 Match each number from (A) and (B) to the result rounded to the nearest One:

- (A)
- 76.35
 - 42.72
 - 77.09
 - 41.79

Rounding to the nearest One

- 42
- 77
- 43
- 76

- (B)
- 76.46
 - 42.83
 - 41.53
 - 77.47



Test (2)

1 Choose the correct answer:

1 Eman wrote this expression $187 + 146.5 = M$. These two numbers represent the height of the Great Pyramid and the height of the Cairo Tower. What does the letter M represent?


- a The Great height.
- b The distance between the Cairo Tower and the Great Pyramid.
- c The difference between the heights of the Cairo Tower and the Great Pyramid.
- d The sum of heights of the Cairo Tower and the Great Pyramid.

2 All of the numbers are divisible by 3.

- a 13 , 27 , 15 b 21 , 15 , 72 c 29 , 30 , 18 d 300 , 18 , 43

2 Solve the following equations using bar models:

a $6.325 + L = 12.48$



L =

b $48.54 - K = 16.918$



K =

c $N - 17.42 = 3.58$



N =

3 Put a (✓) for the correct statement and a (X) for the incorrect statement:

- a $0.25 - 0.2 = 0.5$ ()
- b $7.8 < 8 + 0.7$ ()
- c $43 \frac{6}{1,000} = 43.006$ ()
- d $\frac{8}{5} = 0.16$ ()

4 First: All of the following statements are correct except:

- a If the digit in the decimal moves one place to the right, its value decreases by 10 times.
- b If the digit in the decimal moves two places to the right, its value decreases by 100 times.
- c If the digit in the decimal moves one place to the right, its value increases by 10 times.
- d If the digit in the decimal moves three places to the right, its value decreases by 1,000 times.

Second: The factors of K are (2, 3, 7) and the factors of N are (2, 3, 5).

Find:

- a (G.C.F) of K , N.
- b (L.C.M) of K , N.

Solution: K =

N =

(G.C.F) =

(L.C.M) =



Test (3)

1 Choose the correct answer:

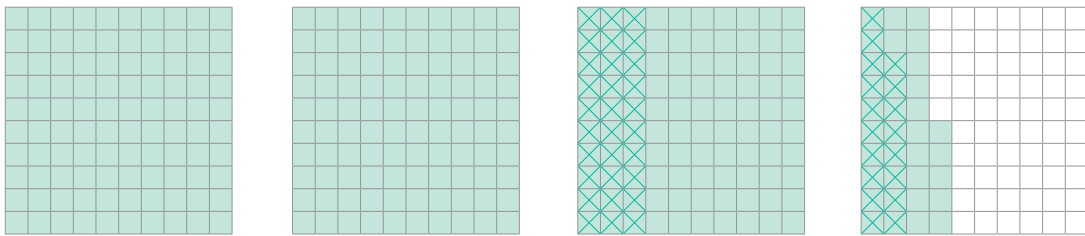
- 1 The number: $3,764.3649 \approx \dots\dots\dots$ (to the nearest Thousandth).
 a 3,764.364 b 3,764.365 c 3,764.4 d 4,000
- 2 The prime number is the number which has
 a four factors only b two factors only
 c three factors only d one factor only
- 3 3 milliard, three hundred and seventy-five thousandths =
 a 3,000,375 b 300,000.375
 c 3,000,000,000.375 d 3,000,000.375

2 Complete the factor tree and write the decomposing of the number of its prime factors:



- a The prime factors of 45 are
- b The prime factors of 98 are

3 Write a mathematical expression equivalent to the model and use the model to find the value of the mathematical expression:



The mathematical expression: - =

4 The weight of an empty truck is 4,500 kilograms, and is loaded with boxes of mineral water. Its weight became 5,216.72 kilograms. What is the weight of the boxes?

The weight of the boxes =
 = kilograms.

Test (4)

1 Choose the correct answer:

- 1 (L.C.M) of (7, 8) is
 - a 65
 - b 15
 - c 56
 - d 112
- 2 (2, 3, 3) are the prime factors of the number
 - a 12
 - b 18
 - c 15
 - d 8
- 3 The place value of the digit 9 in the number 452.379 is
 - a 0.09
 - b thousandth
 - c 0.009
 - d hundredth
- 4 (G.C.F) of (16 , 24) is
 - a 8
 - b 16
 - c 24
 - d 48

2 Complete the following:

- a 73 thousandths =
- b The number: 2.57 is read as
- c $379.95 \approx$ (to the nearest Tenth).
- d $5.9734 \approx 5.9730$ (to the nearest

3 Match the equal results:

0.15	$1,500 \div 1,000$	$\frac{15}{1,000}$
0.015	$1.5 \div 10$	$\frac{150}{100}$
1.5	$0.15 \div 10$	$\frac{15}{100}$

4 Solve the following equations using bar models:

a $23.518 + K = 25$



K =

b $Y - 0.765 = 18.235$



Y =



Test (5)

1 Choose the correct answer:

- 1 (L.C.M) of (25 , 35) is
- a 5 b 25 c 35 d 175
- 2 Hayat wants to write an equation with a variable to represent (35.9 plus a number equals 40), which of the following equations will be correct?
- a $k = 40 + 35.9$ b $35.9 + k = 40$ c $40 + k = 35.9$ d $40 - k = 35.9$
- 3 (G.C.F) of (9, 12, 15) is
- a 3 b 9 c 12 d 180
- 4 $9.38 - 8.98$ $1 - 0.6$
- a > b < c =

2 First: Reorder the following set of numbers ascendingly:

6.52 , 65.2 , 0.652 , 6.052

The ascending order :,,,

Second: Use different methods to decompose the number: 73.85.

- a The first method (the expanded form):
- b The second method:
- c The third method:

3 First: Is the equation $K = 55 + 54 - 12 \times 9$ equivalent to the equation

$Y = 0.64 + 0.36$? (Yes No)

Second: Solve the following equations:

- a $0.36 + Y = 1$ $Y =$
- b $K - 3.18 = 0.82$ $K =$
- c $28.24 + L = 30.46$ $L =$

4 Two pieces of cloth: the first is 5.6 decimeters wide and the second is 42 centimeters wide. The two pieces were divided into strips with equal widths. What is the width of these strips in centimeters?

.....

Test (6)

1 Choose the correct answer:

- 1 The value of the digit 5 in the number: 43.652 is
 a 0.005 b 0.5 c 0.05 d 5
- 2 The number: 485.63 rounded to the nearest Tenth equals
 a 490.0 b 486.0 c 485.6 d 500.0
- 3 The decimal 0.085 is read as
 a eighty-five b eighty-five hundredths
 c eighty-five tenths d eighty-five thousandths
- a The least common multiple (L.C.M) of (6, 9) is
 a 3 b 54 c 18 d 15

2 Put the suitable sign (< , > or =):

- a $6 - 2.05$ $1.25 + 2.7$ b $99.89 - 90.9$ $10 - 1.01$
 c $58.003 - 57.03$ $1 + 0.973$ d $7.9 + 2.3$ $11.7 - 1.3$

3 First: Put a (✓) for the correct equation and a (X) for the incorrect equation:

- a $0.9 - 0.40 = 0.5$ ()
 b $6.7 < 7 + 0.6$ ()
 c $215 \frac{30}{100} = 215.03$ ()
 d $\frac{7}{5} = 1 \frac{4}{10}$ ()

Second: Is the equation $y = 6.5 + 4.25$ equivalent to the equation

$k = 6.55 + 4.2?$ (Yes No)

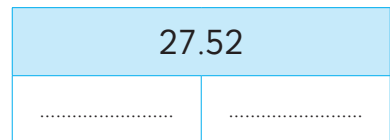
4 First: Solve the following equations using bar models:

a $5.279 - M = 2.918$



M =

b $23.019 + R = 27.52$



R =



Test (7)

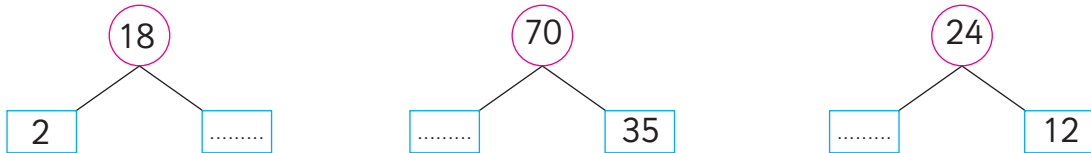
1 Choose the correct answer:

- 1 Which of the following represents an equation?
 - a $5.2 + 15.8$ b $y - 0.12$ c $x - 0.12 = 30$ d $2.37 - 0.5$
- 2 $3.056 = \dots\dots\dots$.
 - a $3 + 56$ b $3 + 0.05 + 0.006$ c $30 + 0.5 + 0.006$ d $56 + 0.03$
- 3 The place value of the digit 3 in the number: 7.234 is $\dots\dots\dots$.
 - a tens b hundredth c tenth d thousandth
- 4 All of the following are prime numbers except $\dots\dots\dots$.
 - a 17 b 23 c 27 d 41

2 First: Read the following mathematical phrases then classify them to "equations", "mathematical expressions" or "neither of them":

- a $19.72 - 8.006$ b $L = 2 \times 17$
- c $k - 0.35$ d $35.16 - 19.9 = 15.26$

Second: Complete the factor trees by writing the missing prime factors:



3 a Write multiples of the number: 3 that are included between 20 and 40.

.....

b Write multiples of the number: 4 that are included between 19 and 40 then find the common multiples of the numbers 3 , 4

.....

4 A fruit seller put 9 pears on a plate and 7 apples on another plate. If he sells the same number of the two fruits, what is the smallest number he has sold of these fruits?

.....

Test (8)

1 Choose the correct answer:

- 1 The greatest common factor (G.C.F) of (21, 42) is
 a 7 b 21 c 42 d 126
- 2 (L.C.M) of all numbers is
 a 0 b 1 c 2 d 10
- 3 $375.92 \approx$ (to the nearest whole number)
 a 380 b 375.9 c 376 d 375
- 4 $37 + 0.04 = 0.2 =$
 a 37.06 b 37.6 c 37.24 d 37.42

2 First: Complete the following:

- 1 If the number: 17.419 decreases by the value of 1 tenth, it will be
- 2 $0.947 \approx$ (to the nearest Hundredth).
- 3 $3.9543 \approx 3.9540$ (to the nearest).

Second: Write two whole numbers including the following decimal number between them so that the difference between them is as small as possible:

$$\dots < 0.64 < \dots$$

3 Reorder the following set of numbers descendingly:

10.6 , 10.125 , 10.75 , 10.25 , 10.50

The descending order: , , , ,

4 First: Find the result of the following by shading the minuend on the digital board and add X's to represent the subtrahend:

$$2 - 0.58 = \dots$$

Second: Fayrouz trains every 12 days while Nilly trains every 8 days. They are training together today. How many days will pass until they train together again?

.....



Test (9)

1 Choose the correct answer:


- 1 36 hundredths + 37 hundredths
 - a 0.01
 - b 0.1
 - c 1
 - d 0.400
- 2 If $y - 0.43 = 8$, then $y =$
 - a 7.57
 - b 8.43
 - c 4.03
 - d 3.7
- 3 The factors of the digit 6 are
 - a 2, 3
 - b 1, 2, 3
 - c 2, 3, 6
 - d 1, 2, 3, 6
- 4 $258.56 \approx$ (to the nearest Tenth)
 - a 260
 - b 258
 - c 258.6
 - d 258.5

2 Complete the following:

- a $28.319 \times 10 =$
- b $36.95 \div 10 =$
- c $539.283 =$ (to the nearest Hundredth)
- d $327.85 - 99.237 =$

3 Solve the following equations using bar models:

a $35.427 = K + 9.216$



K =

b $R - 17.063 = 5.98$



R =

4 First: Put the suitable sign (<, > or =):

- a (G.C.F) of (5, 7) (G.C.F) of (2, 6).
- b (L.C.M) of (2, 3) (L.C.M) of (3, 6).

Second: Find (G.C.F) for (2, 8) then write a number greater than 40 so that it is a common multiple of (2, 8) and also a multiple of the product of their multiplying.

.....

Test (10)

1 Choose the correct answer:

- 1 $3.517 > \dots\dots\dots$.
 a 3.518 b 3.715 c 3.009 d 3.6
- 2 Which of the following is not a prime number?
 a 11 b 17 c 18 d 7
- 3 (L.C.M) of (12, 18) is
 a 6 b 30 c 36 d 72
- 4 The number of factors of 12 is
 a 2 b 4 c 6 d 8

2 Complete the following:

- a $16.035 = \dots\dots\dots + \dots\dots\dots + \dots\dots\dots + \dots\dots\dots$
 b If: $K + 0.048 = 2.56$ then $K = \dots\dots\dots$
 c $359.54 \approx \dots\dots\dots$ (to the nearest whole number)

3 A piece of cloth is 14.56 m long. Another piece of cloth is 25.08 m long. How much longer is the second piece than the first?

4 Match each item in (A) to the equivalent decimal in (B):

(A)	(B)
a thirty-six and seven hundredths	a 36.7
b $59.42 - 22.72 = \dots\dots\dots$	b 37.6
c $15.41 + 22.19 = \dots\dots\dots$	c 37.7
d $30 + 6 + 0.007 = \dots\dots\dots$	d 36.07
e $93 - 55.3 = \dots\dots\dots$	e 36.007



Answers

Test 1

- 1 1 c 2 d 3 c 4 c
- 2 a 0.003 b fifty-six hundredths c $652.0274 \approx 652.027$ d $0.750 = \frac{750}{1,000} = \frac{75}{100}$
- 3 The actual value = 767.69 The estimation: $730 = 30 + 700$ The rounding: 767.7
- 4 $76.35 \approx 76 \approx 76.46$, $42.72 \approx 43 \approx 42.83$, $77.09 \approx 77 \approx 77.47$, $41.79 \approx 42 \approx 41.53$

Test 2

- 1 1 d 2 b
- 2 a = 6.155 , b = 31.622 , c = 21
- 3 a) ✗ b) ✓ c) ✓ d) ✗
- 4 First: c Second: K = 42 , N = 30 a (G.C.F) = 6 b (L.C.M) = 210

Test 3

- 1 1 b 2 b 3 c
- 2 a 3 , 3 , 5 b 2 , 7 , 7
- 3 $3.35 - 0.48 = 2.87$
- 4 Weight of boxes = 716.72 kg.

Test 4

- 1 1 c 2 b 3 b 4 a
- 2 a 0.073 b two and seventy-five hundredths c 380.0 d thousand
- 3 $0.15 = 1.5 \div 10 = \frac{15}{100}$, $0.015 = 0.15 \div 10 = \frac{15}{1,000}$, $1.5 = 1,000 \div 1,500 = \frac{150}{100}$
- 4 a K = 1.482 b Y = 19

Test 5

- 1 1 d 2 b 3 a 4 c
- 2 First: 0.625 , 6.052 , 6.52 , 65.2
Second: a $70 + 3 + 0.8 + 0.05$ b $73 + 0.85$ c $70 + 3.85$
- 3 First: Yes Second: a) Y = 0.64 b) K = 4 c) L = 2.22
- 4 $5.6 \text{ dm} = 56 \text{ cm}$, Width = 7 cm

Test 6

- 1 c c d c
- 2 a = b = c < d <
- 3 First: a ✓ b ✓ c ✗ d ✓ Second: Yes
- 4 a 2.361 b R = 4.051

Test 7

- 1 c b b c
- 2 First: b equations d mathematical expressions a , c neither of them
Second: a 2 , 3 , 3 b 2 , 5 , 7 c 2 , 2 , 2 , 3
- 3 a 21 , 24 , 27 , 30 , 33 , 36 , 39
 b 20 , 24 , 28 , 32 , 36 (L.C.M) for (4 , 3) is 24
- 4 64

Test 8

- 1 b a c c
- 2 First: a 17.319 b 0.95 c thousand Second: 1 , 0
- 3 10.75 , 10.6 , 10.50 , 10.25 , 10.125
- 4 First: 1.42 Second: 24 days.

Test 9

- 1 c b d c
- 2 a 283.19 b 3.695 c 593.28 d 228.613
- 3 a K = 26.211 b R = 23.043
- 4 First: a > b = Second: (G.C.F) = 48 , 2

Test 10

- 1 c c c c
- 2 a $10 + 6 + 0.03 + 0.005$ b K = 2.512 c 360
- 3 10.25 meters.
- 4 a 36.07 b 36.7 c 37.6 d 36.007 e 37.7

